

# Eletromagnetismo Avançado

3º ciclo  
Aula de 19 de  
novembro

# Radiação de dipolo

$$q(t) = q_0 \cos(\omega t)$$

$$r \gg \lambda \gg d$$

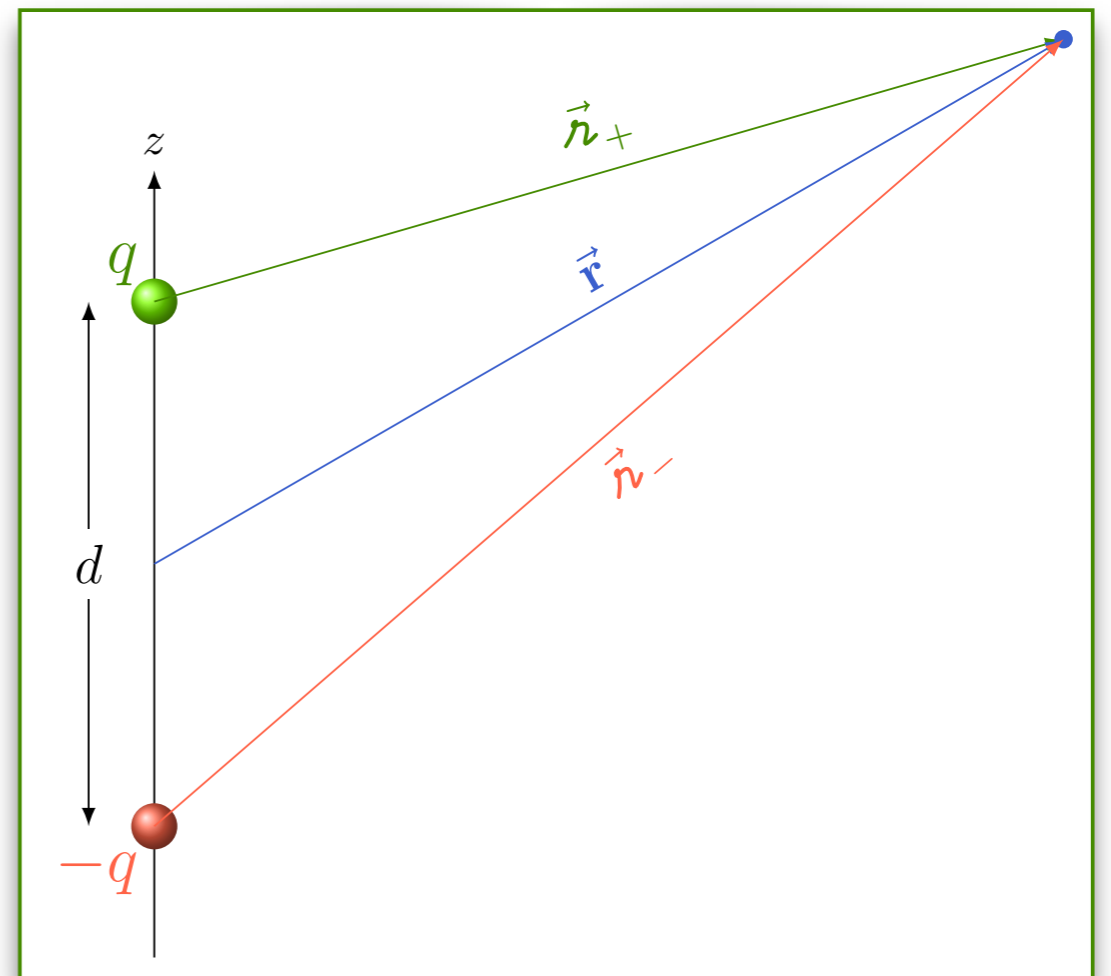
$$V(\vec{r}, t) = -\frac{p_0 \omega}{4\pi\epsilon_0 c} \frac{\cos \theta}{r} \sin \omega\left(t - \frac{r}{c}\right)$$

$$\vec{A}(\vec{r}, t) = -\frac{\mu_0 p_0 \omega}{4\pi r} \sin \omega\left(t - \frac{r}{c}\right) \hat{z}$$

$$\vec{E}(\vec{r}, t) = -\frac{\mu_0 p_0 \omega^2}{4\pi} \frac{\sin \theta}{r} \cos \omega\left(t - \frac{r}{c}\right) \hat{\theta}$$

$$\vec{B}(\vec{r}, t) = -\frac{\mu_0 p_0 \omega^2}{4\pi c} \frac{\sin \theta}{r} \cos \omega\left(t - \frac{r}{c}\right) \hat{\phi}$$

$$\langle \vec{S} \rangle = \frac{\mu_0 p_0^2 \omega^4}{8\pi c} \frac{\sin^2 \theta}{4\pi r^2} \hat{r}$$



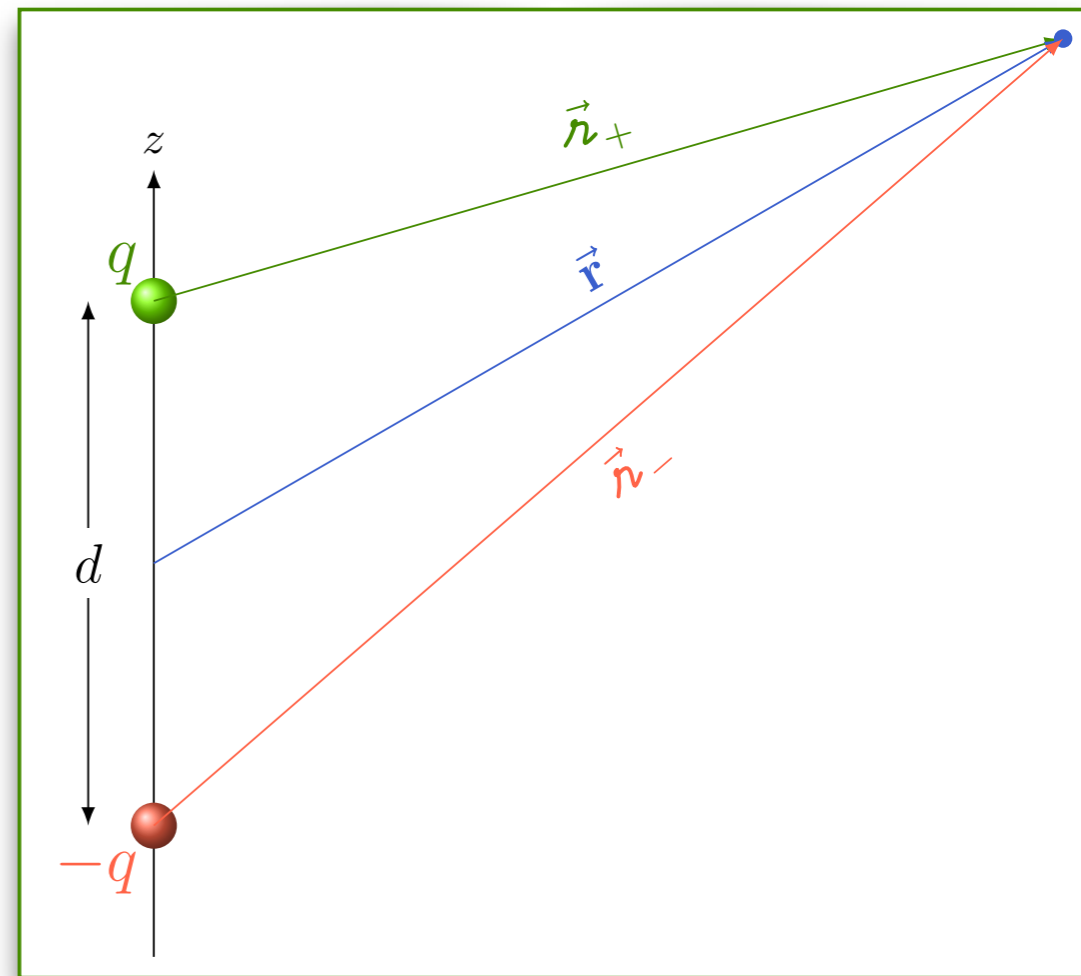
$$\langle \vec{S} \rangle = \frac{\mu_0 p_0^2 \omega^4}{8\pi c} \frac{\sin^2 \theta}{4\pi r^2} \hat{r}$$

Pratique o que aprendeu

$$q(t) = q_0 \cos(\omega t)$$

$$r \gg \lambda \gg d$$

Qual é a resistência radiativa do fio?



$$\langle \vec{S} \rangle = \frac{\mu_0 p_0^2 \omega^4}{8\pi c} \frac{\sin^2 \theta}{4\pi r^2} \hat{r}$$

Pratique o que aprendeu

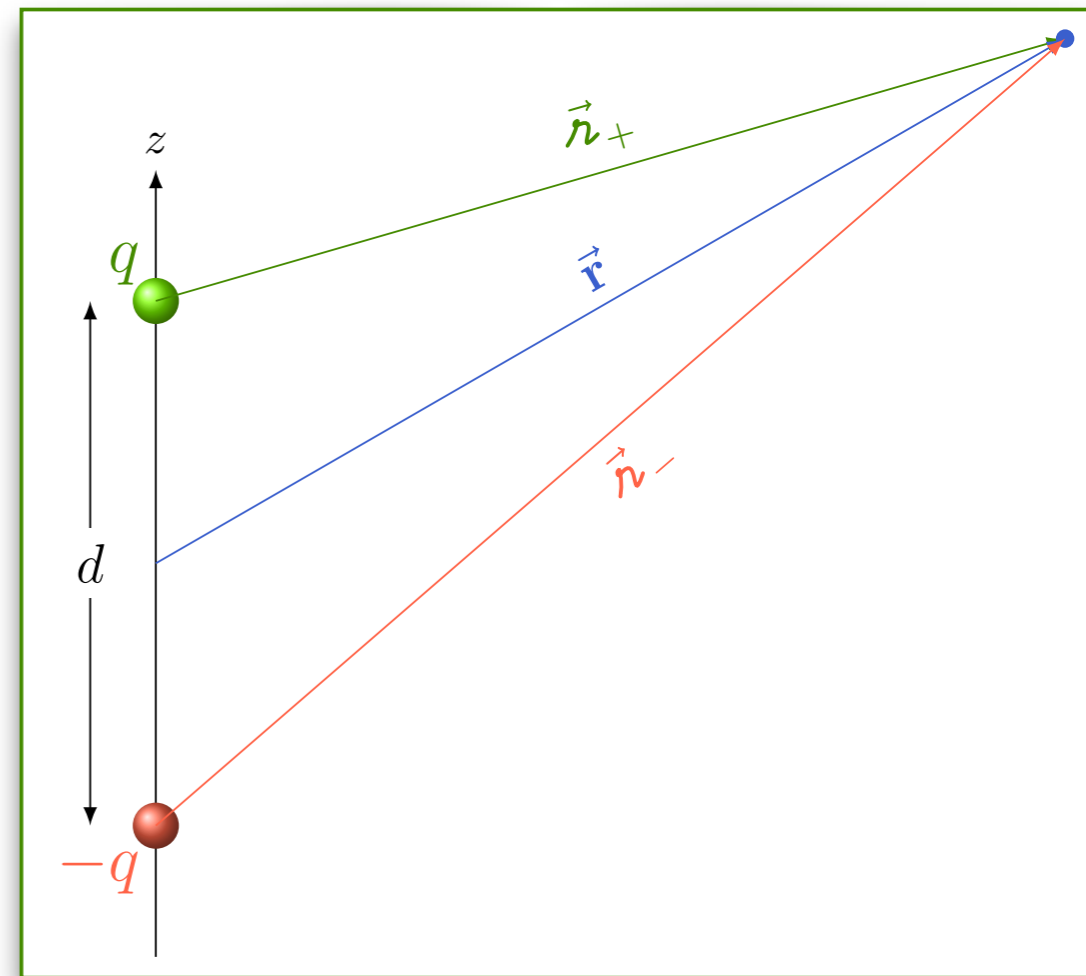
$$q(t) = q_0 \cos(\omega t)$$

$$r \gg \lambda \gg d$$

Qual é a resistência radiativa do fio?

$$P = RI^2$$

POTÊNCIA  
IRRADIADA



$$\langle \vec{S} \rangle = \frac{\mu_0 p_0^2 \omega^4}{8\pi c} \frac{\sin^2 \theta}{4\pi r^2} \hat{r}$$

Pratique o que aprendeu

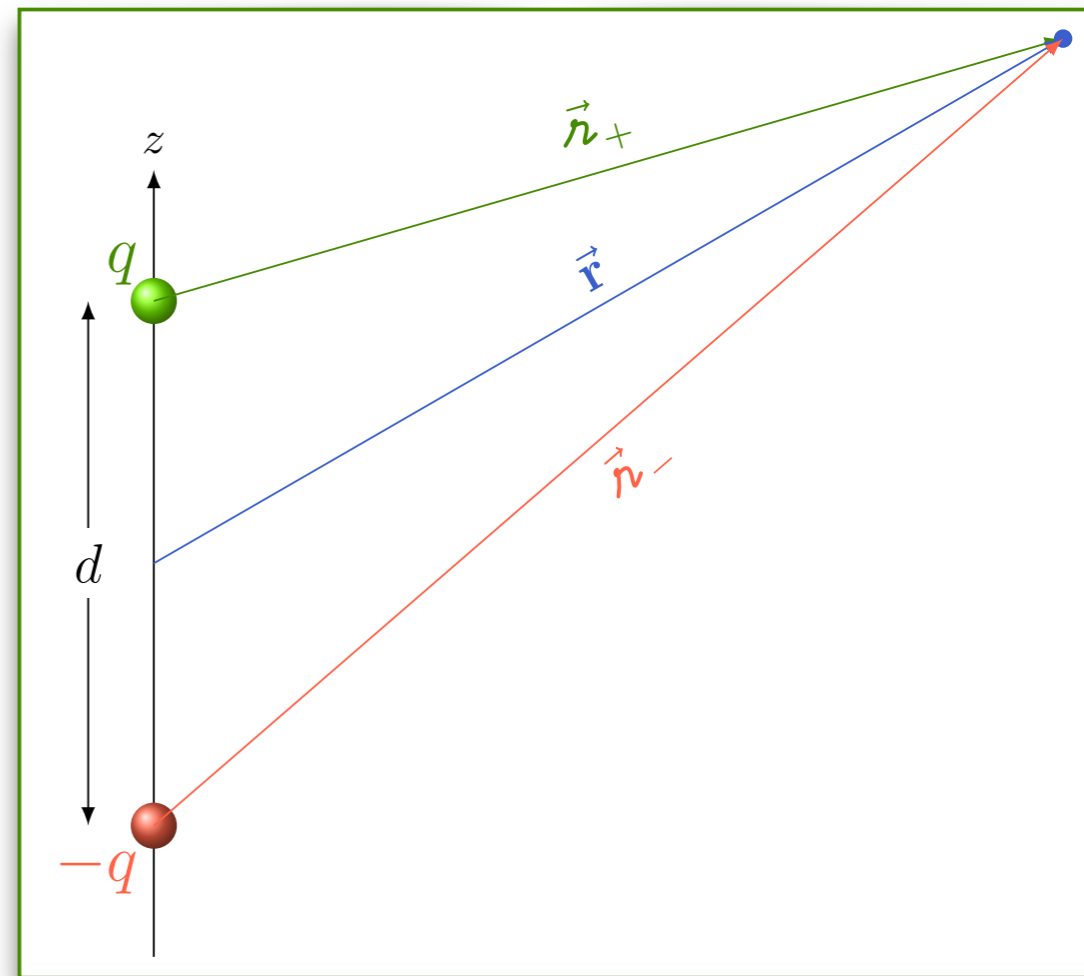
$$q(t) = q_0 \cos(\omega t)$$

$$r \gg \lambda \gg d$$

Qual é a resistência radiativa do fio?

$$P = RI^2$$

$$\vec{I}(t) = -\omega q_0 \sin(\omega t) \hat{z}$$



$$\langle \vec{S} \rangle = \frac{\mu_0 p_0^2 \omega^4}{8\pi c} \frac{\sin^2 \theta}{4\pi r^2} \hat{r}$$

Pratique o que aprendeu

$$q(t) = q_0 \cos(\omega t)$$

$$r \gg \lambda \gg d$$

Qual é a resistência radiativa do fio?

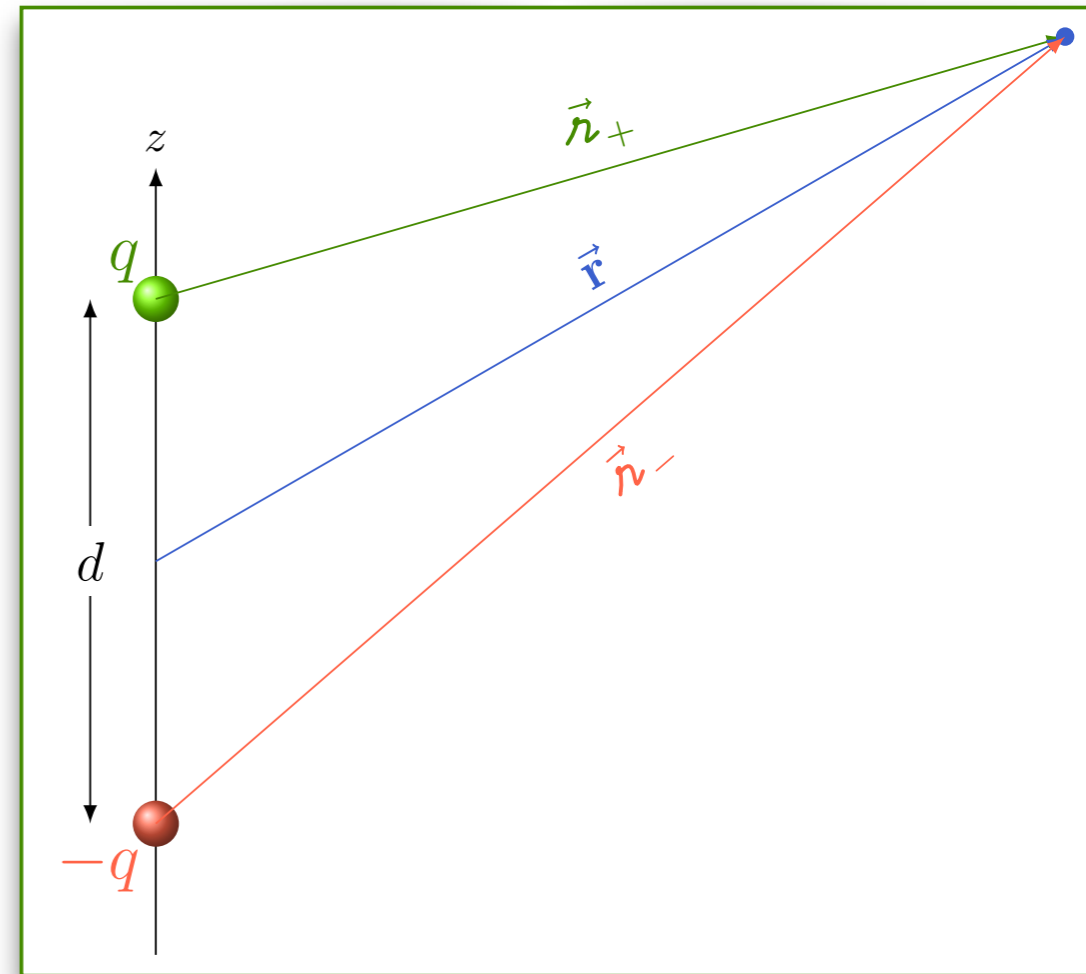
$$P = RI^2$$

$$\vec{I}(t) = -\omega q_0 \sin(\omega t) \hat{z}$$

$$I^2(t) = \omega^2 q_0^2 \sin^2(\omega t)$$

$$P = R \frac{q_0^2 \omega^2}{2}$$

MÉDIA  
NO  
TEMPO



$$\langle \vec{S} \rangle = \frac{\mu_0 p_0^2 \omega^4}{8\pi c} \frac{\sin^2 \theta}{4\pi r^2} \hat{r}$$

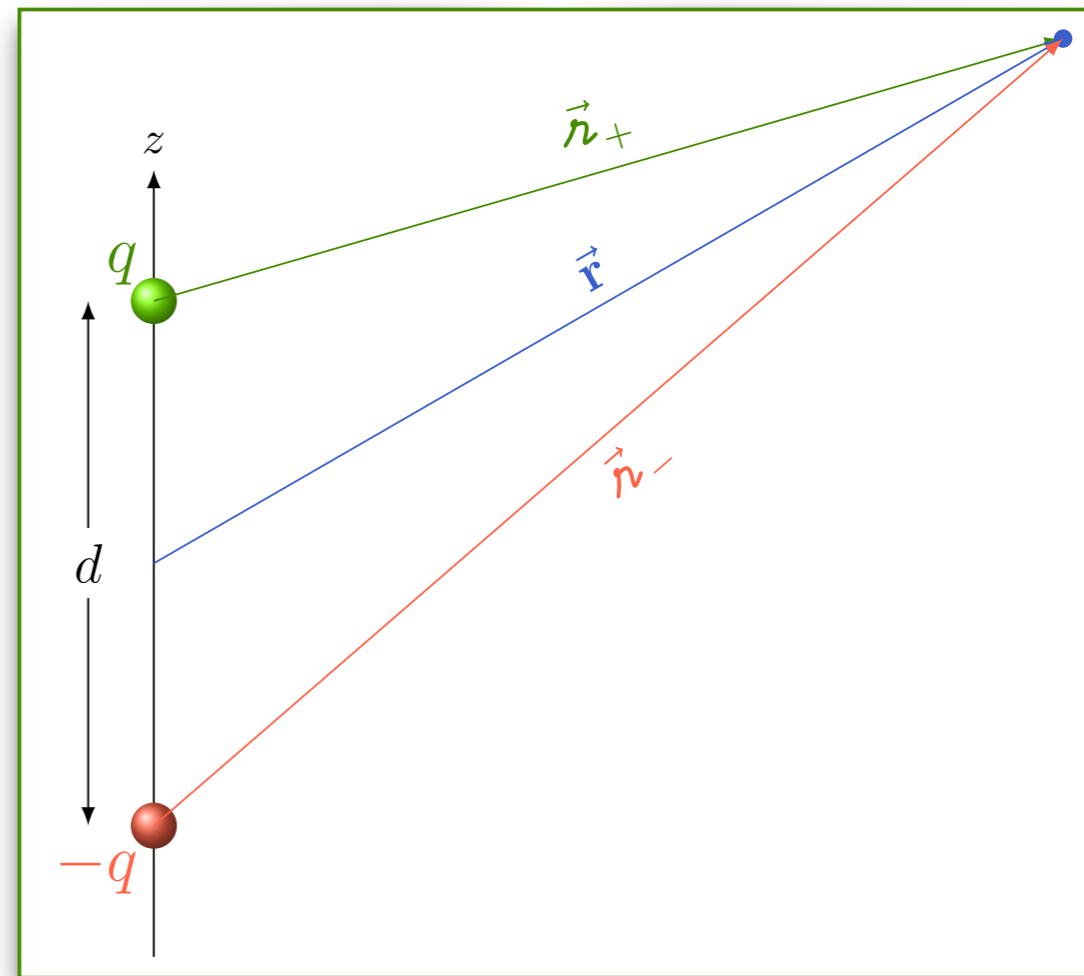
Pratique o que aprendeu

$$q(t) = q_0 \cos(\omega t)$$

$$r \gg \lambda \gg d$$

Qual é a resistência radiativa do fio?

$$P = R \frac{q_0^2 \omega^2}{2}$$



$$\langle \vec{S} \rangle = \frac{\mu_0 p_0^2 \omega^4}{8\pi c} \frac{\sin^2 \theta}{4\pi r^2} \hat{r}$$

Pratique o que aprendeu

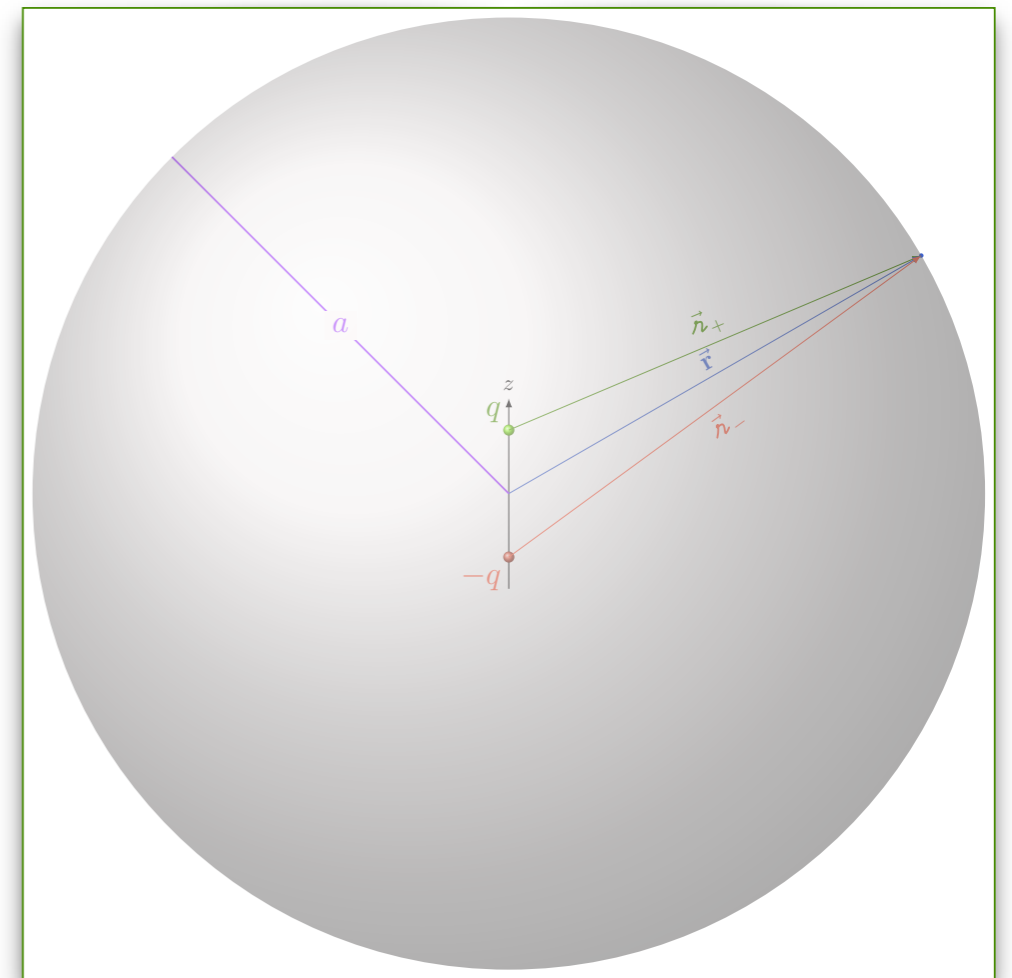
$$q(t) = q_0 \cos(\omega t)$$

$$r \gg \lambda \gg d$$

Qual é a resistência radiativa do fio?

$$P = R \frac{q_0^2 \omega^2}{2}$$

$$P = \int \langle S \rangle dA$$





$$\langle \vec{S} \rangle = \frac{\mu_0 p_0^2 \omega^4}{8\pi c} \frac{\sin^2 \theta}{4\pi r^2} \hat{r}$$

Pratique o que aprendeu

$$q(t) = q_0 \cos(\omega t)$$

$$r \gg \lambda \gg d$$

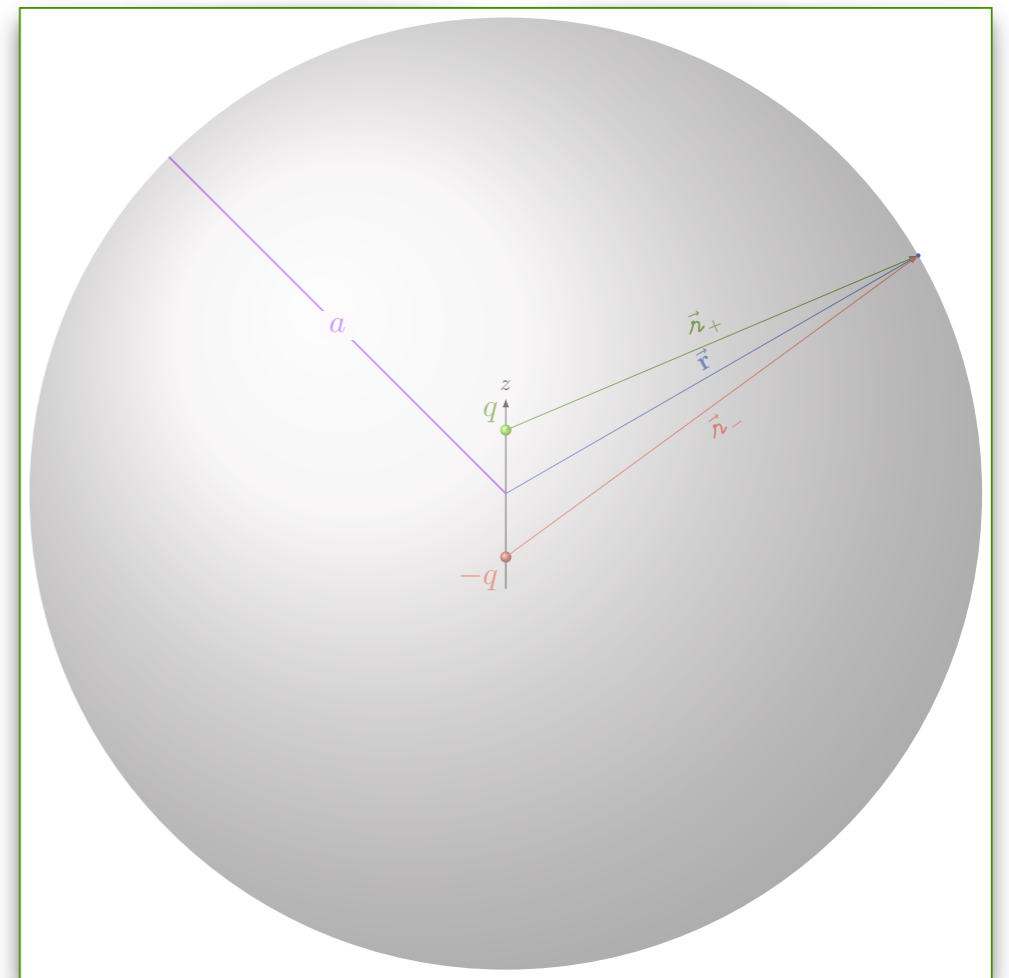
Qual é a resistência radiativa do fio?

$$P = R \frac{q_0^2 \omega^2}{2}$$

$$P = \int \langle S \rangle dA$$

$$P = \frac{\mu_0 d^2}{8\pi c} \frac{q_0^2 \omega^4}{4\pi} \int_0^{2\pi} \int_{-1}^1 \sin^2 \theta \, du \, d\phi$$

↙ ↘  $1 - u^2$



# Pratique o que aprendeu

$$\langle \vec{S} \rangle = \frac{\mu_0 p_0^2 \omega^4}{8\pi c} \frac{\sin^2 \theta}{4\pi r^2} \hat{r}$$

$$q(t) = q_0 \cos(\omega t)$$

$$r \gg \lambda \gg d$$

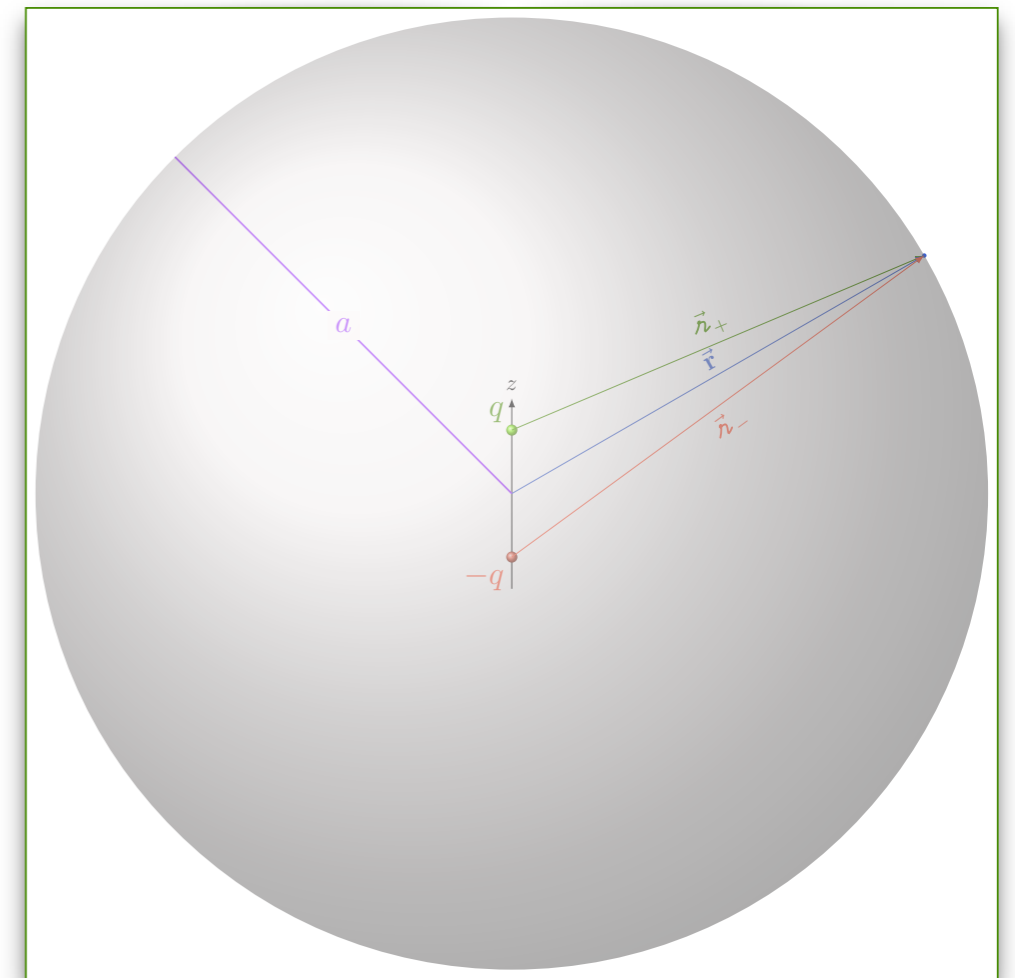
Qual é a resistência radiativa do fio?

$$P = R \frac{q_0^2 \omega^2}{2}$$

$$P = \int \langle S \rangle dA$$

$$P = \frac{\mu_0 d^2}{8\pi c} \frac{q_0^2 \omega^4}{4\pi} \int_0^{2\pi} \int_{-1}^1 \sin^2 \theta \, du \, d\phi$$

$$P = \frac{\mu_0 d^2}{8\pi c} \frac{q_0^2 \omega^4}{4\pi} 2\pi \left(2 - \frac{2}{3}\right)$$



$$P = \frac{\mu_0 d^2 \omega^2}{6\pi c} \frac{q_0^2 \omega^2}{2}$$

$$\langle \vec{S} \rangle = \frac{\mu_0 p_0^2 \omega^4}{8\pi c} \frac{\sin^2 \theta}{4\pi r^2} \hat{r}$$

Pratique o que aprendeu

$$q(t) = q_0 \cos(\omega t)$$

$$r \gg \lambda \gg d$$

Qual é a resistência radiativa do fio?

$$P = R \frac{q_0^2 \omega^2}{2}$$

$$P = \frac{\mu_0 d^2 \omega^2}{6\pi c} \frac{q_0^2 \omega^2}{2}$$

$$\omega = \frac{2\pi}{\lambda} c$$

$$R = \frac{2\pi}{3} \sqrt{\frac{\mu_0}{\epsilon_0}} \left( \frac{d}{\lambda} \right)^2$$

