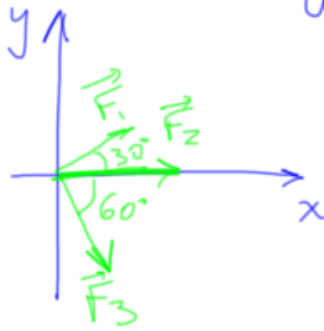


Exercícios do Capítulo 5: (Halliday & Resnick)

5



$a = ?$

a) em x:

$$\vec{F}_{Rx} = (32 \cdot \cos 30^\circ + 55 + 41 \cdot \cos 60^\circ) \hat{i}$$

$$\vec{F}_{Ry} = (32 \cdot \sin 30^\circ + 0 - 41 \cdot \sin 60^\circ) \hat{j}$$

$$\Rightarrow a_x = \frac{F_x}{m} \Rightarrow \vec{a}_x = \frac{103,2}{120} \hat{i} = 0,86 \hat{i} \text{ m/s}^2$$

$$a_y = \frac{F_y}{m} \Rightarrow \vec{a}_y = \frac{-19,5}{120} = -0,16 \hat{j} \text{ m/s}^2$$

$$b) a = \sqrt{a_x^2 + a_y^2} = 0,87 \text{ m/s}^2$$

$$c) \operatorname{tg} \theta = \frac{a_y}{a_x} \Rightarrow \theta = \operatorname{tg}^{-1} \frac{a_y}{a_x} \Rightarrow \theta = -11^\circ$$

10

$$m = 0,15 \text{ kg}$$

$$x(t) = -13 + 2t + 4t^2 - 3t^3$$

$$\vec{F} = ?$$

$$t = 3,4 \text{ s}$$

$$v = \frac{dx}{dt} = 2 + 8t - 9t^2$$

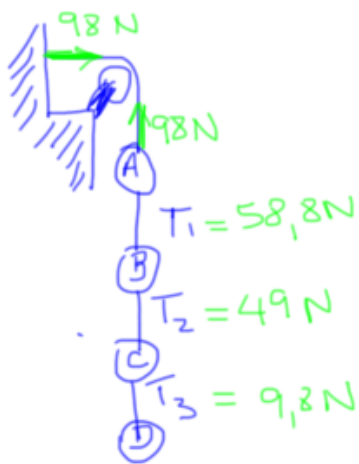
$$a = \frac{dv}{dt} = 8 - 18t$$

$$\text{em } t = 3,4 \text{ s} \Rightarrow a = -53,2 \text{ m/s}^2$$

$$\Rightarrow \vec{F} = m \cdot \vec{a} \text{ como se movimenta em } x:$$

$$\vec{F} = 0,15 \times (-53,2 \hat{i}) = \boxed{-7,98 \hat{i} \text{ N}}$$

13



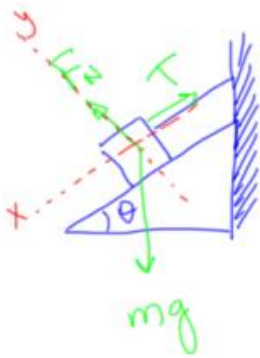
$$m_D \cdot g = T_3 \Rightarrow m_D = \frac{9,8}{9,8} = 1 \text{ kg}$$

$$(m_C + m_D) \cdot g = T_2 \Rightarrow m_C = 4 \text{ kg}$$

$$(m_B + m_C + m_D) \cdot g = T_1 \Rightarrow m_B = 1 \text{ kg}$$

$$(m_A + m_B + m_C + m_D) \cdot g = 98 \Rightarrow m_A = 4 \text{ kg}$$

17



$$m = 8,5 \text{ kg}$$

$$\theta = 30^\circ$$

$$\text{a) em } x: mg \cdot \sin \theta - T = 0$$

$$8,5 \times 9,8 \times \sin 30^\circ = T = 41,7 \text{ N}$$

$$\text{b) em } y: F_N - mg \cdot \cos \theta = 0$$

$$F_N = 8,5 \times 9,8 \times \cos 30^\circ = 72 \text{ N}$$

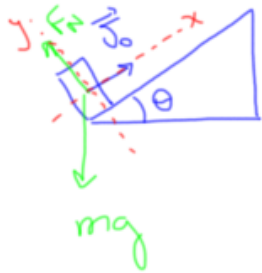
$$\text{c) se corda for cortada } T = 0$$

$$\text{em } x: F_R = mg \sin \theta = ma$$

$$\Rightarrow a = 9,8 \times \sin 30^\circ = 4,9 \text{ m/s}^2$$

note que \leftarrow
usei x positivo para
a esquerda.

31



$$\text{em } x: -mg \sin \theta = ma \Rightarrow a = -5,2 \text{ m/s}^2$$

$$v^2 - v_0^2 = 2a\Delta s \Rightarrow \Delta s = \underline{1,18 \text{ m}}$$

$$b) v = v_0 + at \Rightarrow t = \frac{-v_0}{a} = \underline{0,62 \text{ s}}$$

$$c) v_0 = 0$$

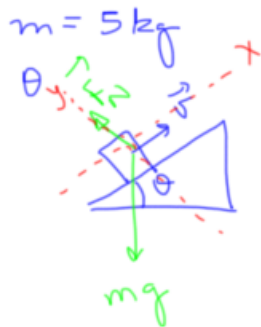
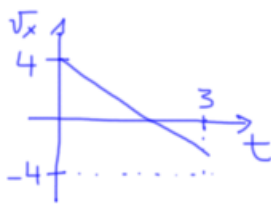
$$\Delta s = 1,18 \text{ m}$$

$$a = 5,2 \text{ m/s}^2$$

$$v^2 = v_0^2 + 2a\Delta s$$

$$v^2 = 2a\Delta s \Rightarrow v = \underline{3,5 \text{ m/s}}$$

40



$$F_N = mg \cos \theta$$

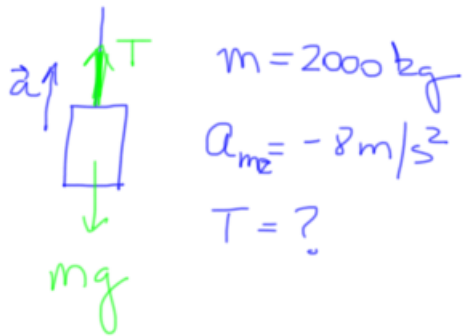
$$mg \sin \theta = ma \Rightarrow \sin \theta = \frac{a}{g}$$

$$\Rightarrow \theta = \arcsin \frac{a}{g} = 14,8^\circ$$

$$a_x = \frac{\Delta v_x}{\Delta t} = -2,5 \text{ m/s}^2$$

$$\Rightarrow F_N = 5 \times 9,8 \times \cos 14,8^\circ = \underline{47,4 \text{ N}}$$

46



$a_{es} \rightarrow$ aceleração do elevador em relação ao solo

$a_{ms} \rightarrow$ aceleração da moeda em relação ao solo

Para o elevador em relação ao solo:

$$T - mg = ma \Rightarrow T = m(a + g)$$

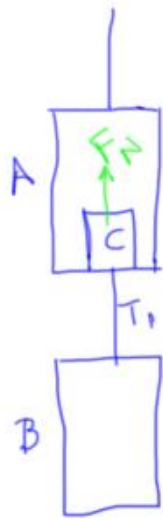
Para a moeda em relação ao solo:

$$a_{ms} = a_{me} + a_{es}$$

$$\Rightarrow a_{es} = -9,8 + 8 = -1,8 \text{ m/s}^2$$

$$\Rightarrow T = 2000 \cdot (-1,8 + 9,8) = 16.000 \text{ N}$$

$$\Rightarrow T = \underline{16 \text{ kN}}$$



$$m_A = 1.700 \text{ kg}$$

$$m_B = 1.300 \text{ kg}$$

$$m_c = 12 \text{ kg}$$

$$T_1 = 1,91 \times 10^4 \text{ N}$$

$$F_N = ?$$

No elevador B:

$$-m_B \cdot g + T_1 = m_B a$$

$$\Rightarrow a = 4,9 \text{ m/s}^2$$

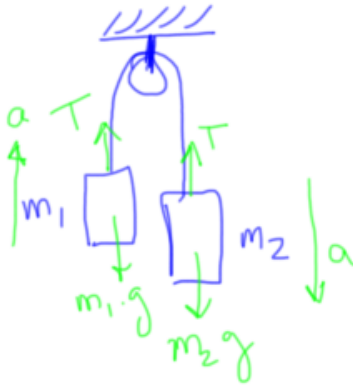
Na caixa do elevador A:

$$-m_c \cdot g + F_N = m_c \cdot a$$

$$\Rightarrow F_N = m_c (a + g)$$

$$\Rightarrow F_N = 176 \text{ N}$$

51



$$m_1 = 1,3 \text{ kg}$$

$$m_2 = 2,8 \text{ kg}$$

$$a) \quad T - m_1 \cdot g = m_1 \cdot a \Rightarrow T = m_1 (a + g)$$

$$T - m_2 \cdot g = -m_2 \cdot a$$

$$\hookrightarrow m_1 (a + g) - m_2 \cdot g = -m_2 \cdot a$$

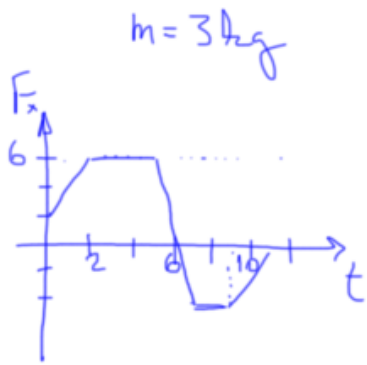
$$\Rightarrow m_1 \cdot a + m_1 \cdot g - m_2 \cdot g = -m_2 \cdot a$$

$$\Rightarrow a (m_1 + m_2) = g (m_2 - m_1)$$

$$\Rightarrow a = g \frac{(m_2 - m_1)}{(m_1 + m_2)} = \underline{\underline{3,6 \text{ m/s}^2}}$$

$$b) \quad T = m_1 \cdot (a + g) = \underline{\underline{17,4 \text{ N}}}$$

63



$$\vec{v}_0 = 3 \hat{i} \text{ m/s}$$

$$t = 11 \text{ s}$$

$$a) \quad a = \frac{dv}{dt} \Rightarrow F = m \cdot \frac{dv}{dt}$$

$$\Rightarrow \int_{v_0}^v dv = \int_0^{11} \frac{F}{m} dt$$

$$= \frac{1}{m} \int_0^{11} F dt$$

*área
sob a
curva*

$$\Rightarrow v - 3 = \frac{1}{3} \cdot 15 \Rightarrow v = 8 \text{ m/s}$$

b) Como $v > 0 \Rightarrow$ movimento
aponta para $+x$.